

INFORMATION BULLETIN MEGA ResoFAST – 2026-27

Moving to Class I

About MEGA ResoFAST

MEGA ResoFAST is a comprehensive knowledge and aptitude assessment conducted by Resonance Schools to evaluate a child's current academic proficiency, conceptual understanding and future learning potential.

For young beginners, **MEGA ResoFAST** is a wonderful opportunity to explore learning in a joyful and encouraging environment. The exam helps children discover their strengths, build confidence and develop curiosity towards academics from an early age.

It also gives students a platform to express their abilities, improve their thinking skills, and become familiar with structured learning experiences in a friendly and motivating way. Such early exposure nurtures confidence, positive learning habits and a strong foundation for future academic success and a bright career ahead.

Who can attend MEGA ResoFAST?

Students currently studying in Classes I to X are eligible to appear for the **MEGA ResoFAST** examination.

How will MEGA ResoFAST help students?

- Students will get a comprehensive report, covering all domains in terms of subjects and aptitude, along with areas requiring improvement and percentile score.
- MEGA ResoFAST will evaluate your Analytical Skills and guide Students further to improve upon.
- Have a clear and personalised picture of your subject preparation concept wise.
- Qualify for a Resonance Schools and Colleges Classroom Programmes across all branches in Telugu states.

How to apply for MEGA ResoFAST?

Students who want to apply for MEGA ResoFAST can login to **www.resofast.com** and apply by paying registration fee.

Registration Fee:

- Rs. 99/- per student – Payable Online using our secure payment gateway using Internet Banking, Debit/Credit card or any other online payment service
- You can also contact with MEGA ResoFAST Co-ordination Call for Registration Assistance on **9121219858 (9 AM to 7 PM)**

MEGA ResoFAST: Exam Process

The **MEGA ResoFAST** examination is conducted across the Rayalaseema region as per the schedule announced on the website. The exam is held in offline mode for students of Classes I to V, while students of Classes VI to X can appear in either offline or online mode.

Disclaimer:

MEGA ResoFAST is an open excellence Test for motivating and rewarding students. Resonance doesn't ensure unconditional admissions on qualifying MEGA ResoFAST. Registration fee is nonrefundable. Resonance keeps all right for keeping details of the students confidential. Exam results cannot be challenged and reviewed.

MEGA ResoFAST 2026 Exam Pattern

Moving to Class I

Exam Pattern

Part	Subject	No. of Questions	Question Numbers	Maximum Marks
Part – A	General Awareness & General Knowledge	15	Q1 to Q15	60
Part – B	English Language	10	Q16 to Q25	40
Part – C	Mathematics, Reasoning & Aptitude	15	Q26 to Q40	60
	Total	40	Q1 to Q40	160

Instructions

- The question paper contains **40 Multiple Choice Questions (MCQs)** numbered from **Q1 to Q40**.
- Each question has **four options: (A), (B), (C) and (D)**.
- Only one option** is correct for each question.
- Tick (✓) the correct option clearly in the question paper booklet.
- Attempt all questions.**
- Each question carries **4 marks**.
- There is no negative marking.**
- Do not tick **more than one option** for any question.
- Questions with **multiple options ticked** will be treated as **invalid**.
- Use only a **pencil** or **blue/black ballpoint pen** to mark the answers.
- The use of **white correction fluid** is strictly prohibited.
- Calculators, mobile phones, smart watches,** or any other **electronic gadgets** are not allowed inside the examination hall.
- Blank pages provided at the end of the booklet may be used for **rough work**.
- Submit the **question paper booklet** to the invigilator before leaving the examination hall.
- Students may receive assistance only for **reading the questions**, if required.

MEGA ResoFAST SYLLABUS

Moving to Class I

TOPICS		
General Awareness and General Knowledge	English	Mathematics, Reasoning and Aptitude
Living and Non-Living things	Action Words, Sight Words and Position Words	Skip Count in 2's, 5's and 10's
Animals and their Homes	Months of a year	Addition
Good Manners	Days of the Week	Subtraction
Fruits and Vegetables	Synonyms and Antonyms	Before and After Number
Festivals of India	"This" and "That"	Shapes
Community Helpers		





MEGA ResoFAST

Resonance Future Achievers Scholarship Test

SAMPLE TEST PAPER

Duration

1 Hour

Moving to

Class - I

Maximum Marks

160

Important Instructions to the students

Exam Pattern

Part	Subject	No. of Questions	Question Numbers	Maximum Marks
Part – A	General Awareness & General Knowledge	15	Q1 to Q15	60 M
Part – B	English Language	10	Q16 to Q25	40 M
Part – C	Mathematics, Reasoning & Aptitude	15	Q26 to Q40	60 M
	Total	40	Q1 to Q40	160 M

Instructions

1. The question paper contains **40 Multiple Choice Questions (MCQs)** numbered from **Q1 to Q40**.
2. Each question has **four options: (A), (B), (C) and (D)**.
3. **Only one option** is correct for each question.
4. Tick (✓) the correct option clearly in the question paper booklet.
5. **Attempt all questions.**
6. Each question carries **4 marks**.
7. **There is no negative marking.**
8. Do not tick **more than one option** for any question.
9. Questions with **multiple options ticked** will be treated as **invalid**.
10. Use only a **pencil or blue/black ballpoint pen** to mark the answers.
11. The use of **white correction fluid** is strictly prohibited.
12. **Calculators, mobile phones, smart watches, or any other electronic gadgets** are not allowed inside the examination hall.
13. Blank pages provided at the end of the booklet may be used for **rough work**.
14. Submit the **question paper booklet** to the invigilator before leaving the examination hall.
15. Students may receive assistance only for **reading the questions**, if required.

Moving to Class I

PART A – GENERAL AWARENESS AND GENERAL KNOWLEDGE


Tick the correct option.

1. Which of the following is a living thing?

A




B



C




D




2. A rabbit lives in:


A




B



C




D



3. Which of the following is a good manner?

A



B




Throwing waste on roads

Interrupting others

C



D



Saying "Thank You"


Shouting in class

4. Which fruit has many seeds on its outer surface?


A



B



C



D



5. Which vegetable grows underground?


A



B



C



D



6. Diwali is known as the festival of _____.

A

flowers

B

lights

C

colours

D

kites


7. Who treats sick people?

A



Tailor

B



Farmer

C




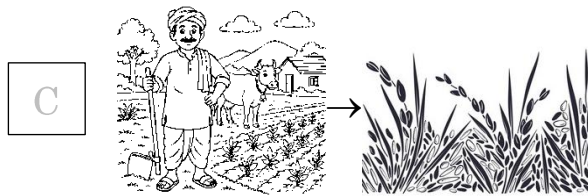

Doctor

D



Driver

8. Choose correct match.



9. Carrot is a _____.

A fruit

B flower

C vegetable

D seed

10. A _____ stitches our clothes.

A carpenter

B tailor

C pilot

D chef

11. Ravi planted two seeds. One grew into a plant while the other did not grow. What can we infer?

A Both seeds were non – living


B One seed may have been damaged

C Plants are non – living

D Seeds never grow

12. Choose the **wrong** pair?


A



B




C



D



13. This picture shows:



A

Laziness

B

Rudeness

C



Good manners

D


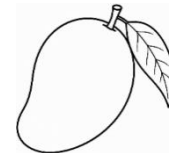
Anger

14. Choose the group with **only** fruits is:


A



B



C



D



15. Which animal and home match **correctly**?


A




B



C




D



PART B – ENGLISH

Tick the correct option.

16. Where is the cat?



- A On **top** of the chair
- B **Between** the box and the chair
- C Farther **away** from the chair than the box
- D **Inside** the box

17. Which is the correct **action** word for juice?

- A Jump
- B Drink
- C Sleep
- D Write

18. Which two words **mean** the **same**?


- A Fast and Quick
- B Up and Down
- C Run and Sit
- D Big and Short

19. Yesterday was Tuesday. What day is tomorrow?



- A Wednesday
- B Monday
- C Thursday
- D Friday

20. Maya is holding a red apple in her hand. Her friend Riya is pointing to a green apple far away on a tree. Which sentence is correct for Maya?




- A "That is my red apple."
- B "This is my red apple."
- C "This is the green apple on the tree."
- D "That is the apple in my hand."
21. Which month comes after May?
- A April B June
- C July D March
22. A room that is **not dark** is:
- A cold B empty
- C bright D heavy
23. Choose the correct word to complete the sentence.

"I ____ like to play in the park with my friends."

- A the B of
- C would D to

24. A bird is flying **above** a tree. A squirrel is sitting **under** the tree. Which one is **closer** to the clouds?



- A The rabbit
- B The tree
- C The bird
- D They are the same
25. School is open on Monday, Tuesday, Wednesday, Thursday and Friday. If today is the last day of school for the week, what day is it?
- A Tuesday
- B Wednesday
- C Friday
- D Thursday

PART C – MATHEMATICS AND REASONING & APTITUDE

Tick the correct option.

26. Skip count by 5:

5, 10, 15, ____

- A 18
- B 20
- C 25
- D 30

27. What is $9 + 4$?

- A 11
- B 12
- C 13
- D 14

28. Which number comes **just before** 50?


A 48

B 49

C 51

D 52

29. Riya had 12 balloons. 5 burst. How many are left?



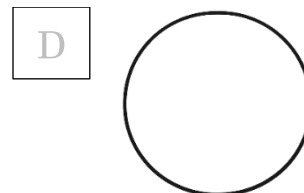
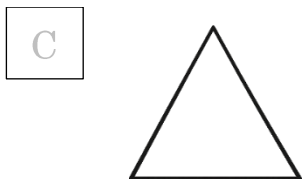
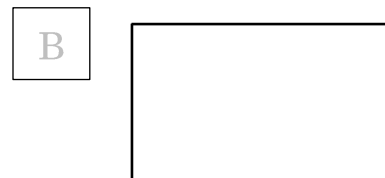
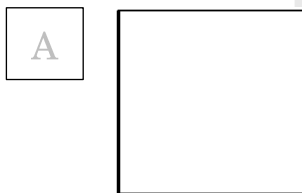
A 5

B 6

C 7

D 8

30. Which shape rolls easily?



31. 25, 30, ____, 40

A 32

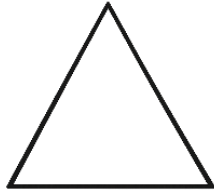
B 34

C 35

D 45


32. Choose correct match.

A




→ 3 sides

B



→ 5 sides

C



→ 2 sides

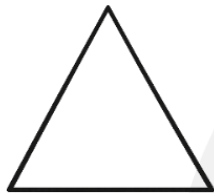
D




→ 3 sides

33. Which one is **different**?


A




B



C



D

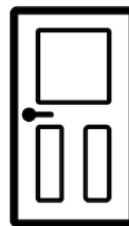


34. Which object has a rectangular shape?

A



B



C

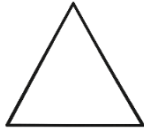


D

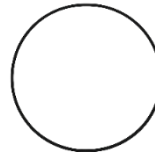


35. Which shape has 4 equal sides?

A



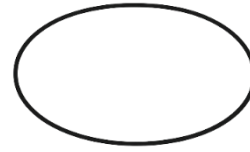
B



C



D



36. Which number should be replaced by ★?

10, 20, ★, 40, 50

A

25

B

30

C

35

D

45

37. Which number comes **just after** 34?

A

33

B

43

C

35

D

53

38. Which gives the biggest number?

A

$4 + 3$

B

$6 + 2$

C

$5 + 5$

D

$7 + 1$

39. What is $15 - 7$?

A

6

B

7

C

8

D

9

40. Which is correct?

A

$12 - 5 = 6$

B

$15 - 5 = 10$

C

$8 + 3 = 10$

D

$20 - 8 = 13$

SPACE FOR ROUGH WORK



SPACE FOR ROUGH WORK

