

INFORMATION BULLETIN MEGA ResoFAST – 2026-27

Moving to Class II

About MEGA ResoFAST

MEGA ResoFAST is a comprehensive knowledge and aptitude assessment conducted by Resonance Schools to evaluate a child's current academic proficiency, conceptual understanding and future learning potential.

For young beginners, **MEGA ResoFAST** is a wonderful opportunity to explore learning in a joyful and encouraging environment. The exam helps children discover their strengths, build confidence and develop curiosity towards academics from an early age.

It also gives students a platform to express their abilities, improve their thinking skills, and become familiar with structured learning experiences in a friendly and motivating way. Such early exposure nurtures confidence, positive learning habits and a strong foundation for future academic success and a bright career ahead.

Who can attend MEGA ResoFAST?

Students currently studying in Classes I to X are eligible to appear for the **MEGA ResoFAST** examination.

How will MEGA ResoFAST help students?

- Students will get a comprehensive report, covering all domains in terms of subjects and aptitude, along with areas requiring improvement and percentile score.
- MEGA ResoFAST will evaluate your Analytical Skills and guide Students further to improve upon.
- Have a clear and personalised picture of your subject preparation concept wise.
- Qualify for a Resonance Schools and Colleges Classroom Programmes across all branches in Telugu states.

How to apply for MEGA ResoFAST?

Students who want to apply for MEGA ResoFAST can login to **www.resofast.com** and apply by paying registration fee.

Registration Fee:

- Rs. 99/- per student – Payable Online using our secure payment gateway using Internet Banking, Debit/Credit card or any other online payment service
- You can also contact with MEGA ResoFAST Co-ordination Call for Registration Assistance on **9121219858 (9 AM to 7 PM)**

MEGA ResoFAST: Exam Process

The **MEGA ResoFAST** examination is conducted across the Rayalaseema region as per the schedule announced on the website. The exam is held in offline mode for students of Classes I to V, while students of Classes VI to X can appear in either offline or online mode.

Disclaimer:

MEGA ResoFAST is an open excellence Test for motivating and rewarding students. Resonance doesn't ensure unconditional admissions on qualifying MEGA ResoFAST. Registration fee is nonrefundable. Resonance keeps all right for keeping details of the students confidential. Exam results cannot be challenged and reviewed.

MEGA ResoFAST 2026 Exam Pattern

Moving to Class II

Exam Pattern

Part	Subject	No. of Questions	Question Numbers	Maximum Marks
Part – A	General Awareness & General Knowledge	15	Q1 to Q15	60
Part – B	English Language	10	Q16 to Q25	40
Part – C	Mathematics, Reasoning & Aptitude	15	Q26 to Q40	60
	Total	40	Q1 to Q40	160

Instructions

- The question paper contains **40 Multiple Choice Questions (MCQs)** numbered from **Q1 to Q40**.
- Each question has **four options: (A), (B), (C) and (D)**.
- Only one option** is correct for each question.
- Tick (✓) the correct option clearly in the question paper booklet.
- Attempt all questions.**
- Each question carries **4 marks**.
- There is no negative marking.**
- Do not tick **more than one option** for any question.
- Questions with **multiple options ticked** will be treated as **invalid**.
- Use only a **pencil** or **blue/black ballpoint pen** to mark the answers.
- The use of **white correction fluid** is strictly prohibited.
- Calculators, mobile phones, smart watches,** or any other **electronic gadgets** are not allowed inside the examination hall.
- Blank pages provided at the end of the booklet may be used for **rough work**.
- Submit the **question paper booklet** to the invigilator before leaving the examination hall.
- Students may receive assistance only for **reading the questions**, if required.

MEGA ResoFAST SYLLABUS

Moving to Class II

TOPICS		
General Awareness and General Knowledge	English	Mathematics, Reasoning and Aptitude
Our Sense Organs	Nouns & Pronouns	Addition & Subtraction up to 99
Community Helpers	Verbs & Adjectives	Patterns
Houses We Live	Articles	Time
Animals Around Us	Present - Simple & Continuous Tense	Odd One Out
Seasons	Rhyming Words	Geometrical Shapes





MEGA ResoFAST

Resonance Future Achievers Scholarship Test

SAMPLE TEST PAPER

Duration
1 Hour

Moving to
Class - II

Maximum Marks
160

Important Instructions to the students

Exam Pattern

Part	Subject	No. of Questions	Question Numbers	Maximum Marks
Part – A	General Awareness & General Knowledge	15	Q1 to Q15	60 M
Part – B	English Language	10	Q16 to Q25	40 M
Part – C	Mathematics, Reasoning & Aptitude	15	Q26 to Q40	60 M
	Total	40	Q1 to Q40	160 M

Instructions

1. The question paper contains **40 Multiple Choice Questions (MCQs)** numbered from **Q1 to Q40**.
2. Each question has **four options: (A), (B), (C) and (D)**.
3. **Only one option** is correct for each question.
4. Tick (✓) the correct option clearly in the question paper booklet.
5. **Attempt all questions.**
6. Each question carries **4 marks**.
7. **There is no negative marking.**
8. Do not tick **more than one option** for any question.
9. Questions with **multiple options ticked** will be treated as **invalid**.
10. Use only a **pencil or blue/black ballpoint pen** to mark the answers.
11. The use of **white correction fluid** is strictly prohibited.
12. **Calculators, mobile phones, smart watches, or any other electronic gadgets** are not allowed inside the examination hall.
13. Blank pages provided at the end of the booklet may be used for **rough work**.
14. Submit the **question paper booklet** to the invigilator before leaving the examination hall.
15. Students may receive assistance only for **reading the questions**, if required.

Moving to Class II

PART A: GENERAL AWARENESS AND GENERAL KNOWLEDGE

Tick the correct option.

1. Which **sense organ** helps us to see?

A



Nose

B



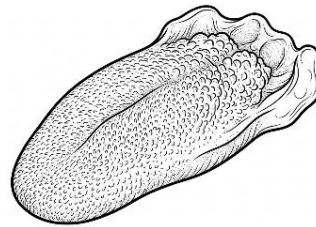
Eyes

C



Ears

D



Tongue

2. A **doctor** works in a _____.

A

school

B

hospital

C

bakery

D

farm

3. Which helper **grows crops** for us?

A

farmer

B

barber

C


carpenter

D

driver


4. An **igloo** is made of _____.

A




Bricks

B



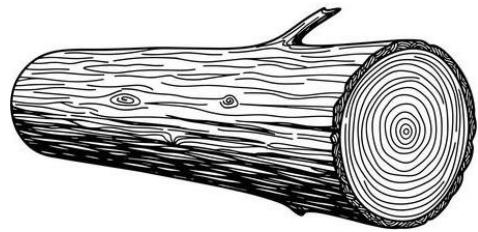
Water

C



Ice

D



Log

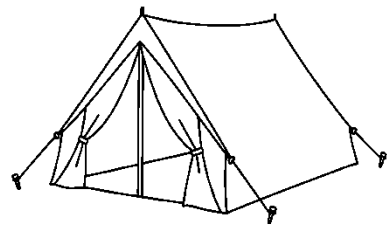
5. People living in **deserts** mostly live in _____ houses.

A



Igloo

B




Tent

C



Stilt House

D



Houseboat

6. Which animal can live **both** on **land** and in **water**?

A

Frog

B

Camel

C

Monkey

D

Cow

7. We use **umbrellas** mostly during the _____ season.

A winter


B rainy


C summer


D autumn

8. Tick **correct** match.

A  → Smelling

B  → Seeing

C  → Hearing

D  → Tasting

9. We **feel** with our:

A eyes

B ears

C tongue

D skin

10. A **camel** is called the “Ship of the _____.”

A Stream

B Water

C Desert

D Forest

11. Riya closed her eyes and still identified an orange by **smelling** it. Which **sense organ** helped her?

A Skin

B Ears

C Nose

D Tongue

12. Which helper would most likely be needed during a **fire accident**?

A




B



C




D



13. Ravi lives in a **rainy place**. Which house is best for him?

A




House boat

B



Tree – house

C



Igloo

D



Tent

14. Which **animals** below are correctly grouped?

A

Cow, Goat, Dog → Wild animals

B

Lion, Tiger, Bear → Domestic animals

C

Cat, Horse, Buffalo → Domestic animals

D

Deer, Camel, Sheep → Pet animals

15. Why do doctors and nurses **wash their hands** before treating patients?

- | | | | |
|----------------------------|--------------------|----------------------------|----------------------------|
| <input type="checkbox"/> A | To save water | <input type="checkbox"/> B | To prevent spreading germs |
| <input type="checkbox"/> C | To make hands cold | <input type="checkbox"/> D | To wear gloves easily |

PART B: ENGLISH

Tick the correct option.

16. Which word in this sentence is a "**special name**" (Proper Noun)?

"My dog, Max, loves to play at the park on Tuesdays."

- | | | | |
|----------------------------|------|----------------------------|------|
| <input type="checkbox"/> A | Dog | <input type="checkbox"/> B | Max |
| <input type="checkbox"/> C | Park | <input type="checkbox"/> D | Play |

17. Which word should we use to replace the underlined words?

"The children are playing in the garden."

- | | | | |
|----------------------------|----|----------------------------|------|
| <input type="checkbox"/> A | He | <input type="checkbox"/> B | She |
| <input type="checkbox"/> C | It | <input type="checkbox"/> D | They |

18. Which word tells about the apple?

"I ate a crunchy, red apple for snack."

- | | | | |
|----------------------------|---------|----------------------------|-------|
| <input type="checkbox"/> A | Ate | <input type="checkbox"/> B | Apple |
| <input type="checkbox"/> C | Crunchy | <input type="checkbox"/> D | Snack |

19. Which sentence shows something that is happening *right now*?



A I jump on the bed.

B I jumped on the bed.

C I am jumping on the bed.

D I will jump on the bed.

20. Which **article** correctly fits in the blank?

"I saw ___ owl sitting on the branch of a tree."

A a

B an

C the

D (no article needed)

21. Which word **rhymes** with "cake"?

A Streak

B Take

C Steak

D Lake

22. If I say "I brush my teeth every day," I am talking about:

A Something I did yesterday.

B A habit of mine, I all the time.

C Something I will do next year.

D Something I am doing this exact second.

23. Which word **describes** how a pillow feels?

A Loud

B Soft

C Salty

D Bright

24. Tick the "**doing word**" in this list.

A table

B happy

C run

D yellow

25. Tick the correct pair of **articles** to finish the sentence.

" ___ sun is shining in ___ sky."

A A / a

B An / the

C The / the

D The / a

PART C: MATHEMATICS AND REASONING & APTITUDE

Tick the correct option.

26. What is $45 + 23$?

A 67

B 68

C 69

D 70

27. What is $90 - 27$?

A 63

B 64

C 65

D 66

28. Find the **next number** in the pattern.

11, 22, 33, 44, ___

A 45

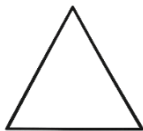
B 50

C 55

D 66

29. Which shape has **no corners**?

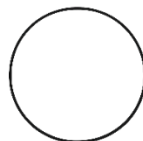
A



B



C



D



30. Which is **correct**?

A

$35 + 14 = 48$

B

$62 - 20 = 42$

C

$40 + 18 = 57$

D

$55 - 15 = 50$

31. Find the **missing** number.

5, 10, 15, ___, 25

A

18

B

19

C

20

D

21

32. Which number comes **just after** 79?

A

78

B

80

C

81

D

82

33. Find the **next number** in the pattern.

2, 4, 6, 8, ___

A

9

B

10

C

11

D

12

34. A **triangle** has ___ sides.

A

2

B

3

C

4

D

5

35. Tick the **right** option.

A $25 + 5 = 30$

B $45 + 10 = 55$

C $60 - 20 = 40$

D All

36. Find the **next number** in the pattern.

1, 3, 5, 7, ___

A 8

B 9

C 10

D 11

37. Rohan had 65 stickers. He gave 20 stickers to his friend and bought 10 more stickers. How many stickers does he have now?

A 45

B 50

C 55

D 60

38. Which number should come in the box?

6, 12, 18, 24, , 36

A 40

B 42

C 30

D 26

39. Tick the **correct** option.

A A square has 4 sides

B A rectangle has 4 sides

C A circle has no sides

D All

40. Which gives the **biggest** answer?

A $25 + 10$

B $40 - 5$

C $18 + 20$

D $50 - 8$

SPACE FOR ROUGH WORK

