

INFORMATION BULLETIN MEGA ResoFAST – 2026-27

Moving to Class III

About MEGA ResoFAST

MEGA ResoFAST is a comprehensive knowledge and aptitude assessment conducted by Resonance Schools to evaluate a child's current academic proficiency, conceptual understanding and future learning potential.

For young beginners, **MEGA ResoFAST** is a wonderful opportunity to explore learning in a joyful and encouraging environment. The exam helps children discover their strengths, build confidence and develop curiosity towards academics from an early age.

It also gives students a platform to express their abilities, improve their thinking skills, and become familiar with structured learning experiences in a friendly and motivating way. Such early exposure nurtures confidence, positive learning habits and a strong foundation for future academic success and a bright career ahead.

Who can attend MEGA ResoFAST?

Students currently studying in Classes I to X are eligible to appear for the **MEGA ResoFAST** examination.

How will MEGA ResoFAST help students?

- Students will get a comprehensive report, covering all domains in terms of subjects and aptitude, along with areas requiring improvement and percentile score.
- MEGA ResoFAST will evaluate your Analytical Skills and guide Students further to improve upon.
- Have a clear and personalised picture of your subject preparation concept wise.
- Qualify for a Resonance Schools and Colleges Classroom Programmes across all branches in Telugu states.

How to apply for MEGA ResoFAST?

Students who want to apply for MEGA ResoFAST can login to **www.resofast.com** and apply by paying registration fee.

Registration Fee:

- Rs. 99/- per student – Payable Online using our secure payment gateway using Internet Banking, Debit/Credit card or any other online payment service
- You can also contact with MEGA ResoFAST Co-ordination Call for Registration Assistance on **9121219858 (9 AM to 7 PM)**

MEGA ResoFAST: Exam Process

The **MEGA ResoFAST** examination is conducted across the Rayalaseema region as per the schedule announced on the website. The exam is held in offline mode for students of Classes I to V, while students of Classes VI to X can appear in either offline or online mode.

Disclaimer:

MEGA ResoFAST is an open excellence Test for motivating and rewarding students. Resonance doesn't ensure unconditional admissions on qualifying MEGA ResoFAST. Registration fee is nonrefundable. Resonance keeps all right for keeping details of the students confidential. Exam results cannot be challenged and reviewed.

MEGA ResoFAST 2026 Exam Pattern

Moving to Class III

Exam Pattern

Part	Subject	No. of Questions	Question Numbers	Maximum Marks
Part – A	General Awareness & General Knowledge	15	Q1 to Q15	60
Part – B	English Language	10	Q16 to Q25	40
Part – C	Mathematics, Reasoning & Aptitude	15	Q26 to Q40	60
	Total	40	Q1 to Q40	160

Instructions

- The question paper contains **40 Multiple Choice Questions (MCQs)** numbered from **Q1 to Q40**.
- Each question has **four options: (A), (B), (C) and (D)**.
- Only one option** is correct for each question.
- Tick (✓) the correct option clearly in the question paper booklet.
- Attempt all questions.**
- Each question carries **4 marks**.
- There is no negative marking.**
- Do not tick **more than one option** for any question.
- Questions with **multiple options ticked** will be treated as **invalid**.
- Use only a **pencil** or **blue/black ballpoint pen** to mark the answers.
- The use of **white correction fluid** is strictly prohibited.
- Calculators, mobile phones, smart watches,** or any other **electronic gadgets** are not allowed inside the examination hall.
- Blank pages provided at the end of the booklet may be used for **rough work**.
- Submit the **question paper booklet** to the invigilator before leaving the examination hall.
- Students may receive assistance only for **reading the questions**, if required.

MEGA ResoFAST SYLLABUS

Moving to Class III

TOPICS		
General Awareness and General Knowledge	English	Mathematics, Reasoning and Aptitude
Transport & Communication	Nouns & Adjectives	Addition & Subtraction - 3 digits
The Sky & Seasons	Verbs & Prepositions	Multiplication & Division
Food for Us	Synonyms & Antonyms	Data Handling
Animals Our Friends	Compound Words	Shapes - 2D & 3D
Places Around Us	Singular & Plural Nouns	Metric Measurement
Solar System	Articles	Directions & Odd One Out





MEGA ResoFAST

Resonance Future Achievers Scholarship Test

SAMPLE TEST PAPER

Duration
1 Hour

Moving to
Class - III

Maximum Marks
160

Important Instructions to the students

Exam Pattern

Part	Subject	No. of Questions	Question Numbers	Maximum Marks
Part – A	General Awareness & General Knowledge	15	Q1 to Q15	60 M
Part – B	English Language	10	Q16 to Q25	40 M
Part – C	Mathematics, Reasoning & Aptitude	15	Q26 to Q40	60 M
	Total	40	Q1 to Q40	160 M

Instructions

1. The question paper contains **40 Multiple Choice Questions (MCQs)** numbered from **Q1 to Q40**.
2. Each question has **four options: (A), (B), (C) and (D)**.
3. **Only one option** is correct for each question.
4. Tick (✓) the correct option clearly in the question paper booklet.
5. **Attempt all questions.**
6. Each question carries **4 marks**.
7. **There is no negative marking.**
8. Do not tick **more than one option** for any question.
9. Questions with **multiple options ticked** will be treated as **invalid**.
10. Use only a **pencil or blue/black ballpoint pen** to mark the answers.
11. The use of **white correction fluid** is strictly prohibited.
12. **Calculators, mobile phones, smart watches, or any other electronic gadgets** are not allowed inside the examination hall.
13. Blank pages provided at the end of the booklet may be used for **rough work**.
14. Submit the **question paper booklet** to the invigilator before leaving the examination hall.
15. Students may receive assistance only for **reading the questions**, if required.

Moving to Class III

PART A – GENERAL AWARENESS AND GENERAL KNOWLEDGE

Tick the correct option.

1. Which **vehicle** moves on **water**?

A Bus

B Aeroplane

C Ship

D Train

2. Which is used to send an **email**?




A Television

B Computer



C Newspaper

D Radio

3. Which **food** helps us to grow **strong**?





4. Which **animal** helps us by **guarding** our house?



Cat

Horse



Dog

Rabbit

5. Which **place** is used to borrow the **books**?

A Hospital

B Library

C Bakery

D Bank

6. The **Earth** is a _____.

A Star

B Planet

C Satellite

D Comet

7. The **Moon** shines because it **reflects** the light of the _____.


A Star

B Earth

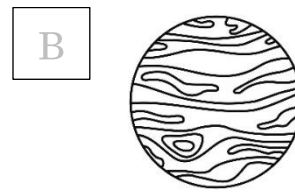
C Sun

D Clouds

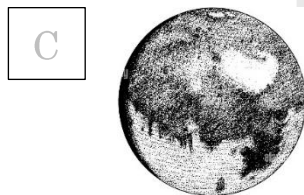
8. Which **planet** is known as the "**Red Planet**"?



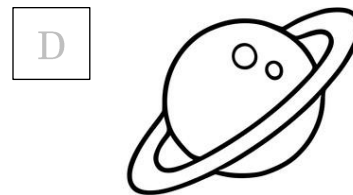
Venus



Jupiter



Mars



Saturn

9. Choose the **correct** answer about **transport**.

A Aeroplane travels in air.

B Ship travels in water.

C Train and bus travel on land.

D All are correct.

10. We buy **medicines** from a _____.



A Bakery



B Pharmacy



C Zoo



D School

11. The **Sun** is a _____.



A Planet



B Star



C Moon

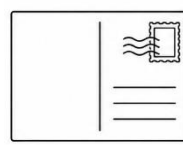


D Satellite

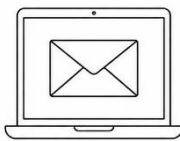
12. Rohan wants to send a **message quickly** to his friend in another city.
Which is the **fastest way**?



Letter



Post Card



Email



Newspaper

13. **Astronauts** see the **Earth** from space as mostly **blue** because:



A It is covered with blue paint



B Most of the Earth is covered with water



C The sky is blue



D Oceans reflect only blue light

14. Aman sent a birthday greeting to his friend using a **mobile phone**.
Which **type of communication** is this?



A Written communication



B Electronic communication



C Animal communication



D Sign communication

15. A cow, goat and buffalo are **useful** animals because they:

A can fly

B give us milk

C live in water

D eat only grass

PART B – ENGLISH

Tick the correct option.

16. Maya is writing a story about a dragon. She wants to use a word that describes the dragon's skin as being **very hard** and **protective**. Which adjective should she use?



A Soft

B Fragile

C Tough

D Invisible

17. Look at the sentence: "*The **bravery** of the young girl saved the kitten.*"
What kind of noun is the bold word in the sentence?

A Common Noun

B Abstract Noun

C Proper Noun

D Collective Noun

18. Which sentence uses an **adjective** to describe a **quantity**?

A The blue car drove fast.

B I have several pencils in my bag.

C That is a beautiful painting.

D The soup is very hot.

19. Choose the **verb** that correctly completes the action in this specific context:

"The scientist _____ the liquid carefully into the beaker."

A

Thought

B

Poured

C

Ran

D

Jumped

20. The chef says "**the cake is delicious**". If you want to use a synonym to agree with him, you would say:

A

It is tasteless.

B

It is savory.

C

It is tasty.

D

It is bitter.

21. What is the best **antonym** for the word "**Ancient**" in the context of building a house?

A

Old

B

Modern

C

Dusty

D

Large

22. You need something to **protect your eyes** from the bright light of the sun. You should put on your _____.

A

Sunblock

B

Sunglasses

C

Sunbeam

D

Sunlight

23. If "Back" + "Pack" = "Backpack," which compound **word describes** the hair on a **person's face**?

A

Eyebrow

B

Raincoat


C

Keyboard

D

Haircut

24. A farmer has one **Goose**. If he buys three more, he now has four _____.



- | | | | |
|----------------------------|---------|----------------------------|--------|
| <input type="checkbox"/> A | Gooses | <input type="checkbox"/> B | Geese |
| <input type="checkbox"/> C | Goosies | <input type="checkbox"/> D | Geeses |

25. Which sentence has the **wrong article**?

- | | |
|----------------------------|---------------------------------------|
| <input type="checkbox"/> A | An apple a day keeps the doctor away. |
| <input type="checkbox"/> B | He is an honest man. |
| <input type="checkbox"/> C | The sun rises in the east. |
| <input type="checkbox"/> D | I bought an new bike. |

PART C – MATHEMATICS AND REASONING & APTITUDE

Tick the correct option.

26. $345 + 278 = ?$

- | | | | |
|----------------------------|-----|----------------------------|-----|
| <input type="checkbox"/> A | 613 | <input type="checkbox"/> B | 623 |
| <input type="checkbox"/> C | 633 | <input type="checkbox"/> D | 643 |

27. What is the **sum** of 125, 245 and 130?

- | | | | |
|----------------------------|-----|----------------------------|-----|
| <input type="checkbox"/> A | 490 | <input type="checkbox"/> B | 500 |
| <input type="checkbox"/> C | 510 | <input type="checkbox"/> D | 520 |

28. Which number should be **added** to 425 to make 700?

A 265

B 275

C 285

D 295

29. Find the **missing** number:

$$850 - \square = 275.$$

A 565

B 575

C 585

D 595

30. Riya has 245 stickers. She gives 98 to her friend and buys 156 more.
How many stickers does she have now?

A 293

B 303

C 313

D 323

31. $72 \div 8 = ?$

A 7

B 7

C 9

D 10

32. Which **multiplication fact** is correct?

A $9 \times 7 = 56$

B $8 \times 6 = 42$

C $7 \times 7 = 49$

D $5 \times 8 = 35$

33. What is **half** of 248?




A 114

B 124

C 134

D 144

34. Look at the table and answer the question.

Fruit	No. of students liked
 Apple	12 students
 Banana	9 students
 Mango	15 students

Which fruit do most students like?

A

Apple

B

Banana




C

Mango

D

Orange

35. Look at the table and answer the question.

Colour of Balls	Number of Balls
 Red balls	18
 Blue balls	24
 Green balls	12

Which colour balls are twice the green balls?

A

Red

B

Blue

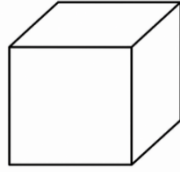
C

Yellow

D

Black

36. A **cube** has how many faces?



A 4

B 5

C 6

D 8

37. Which **unit** is used to measure **length**?

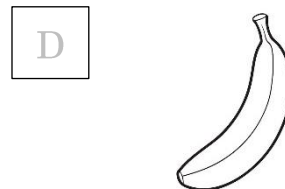
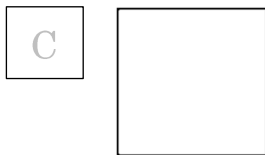
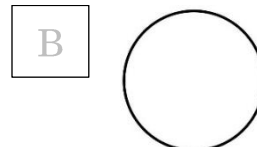
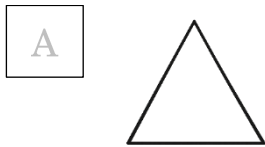
A Kilogram

B Litre

C Metre

D Gram

38. Which one is **different** from others?



39. Ravi walks East and then turns right. Which **direction** is he facing now?

A North

B South

C East

D West

40. Which **multiplication** sentence matches:

5 groups of 4?

A $5+5+5+5$

B 5×4

C $5 \div 4$

D $4 \div 5$

SPACE FOR ROUGH WORK

